
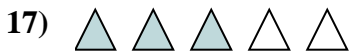
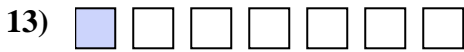
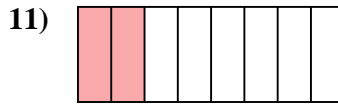
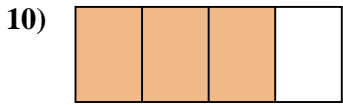
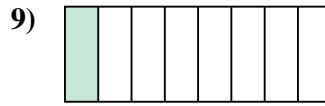
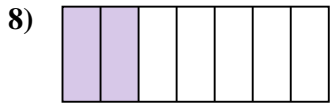
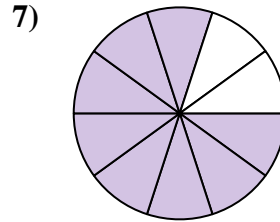
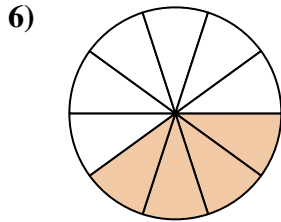
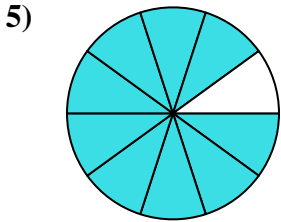

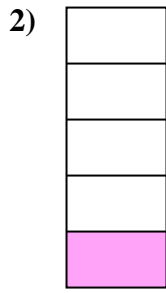





Determine if the shaded amount is 'more', 'less' or 'equal' to half.


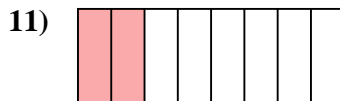
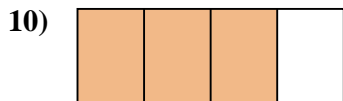
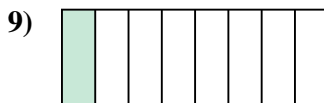
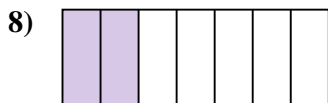
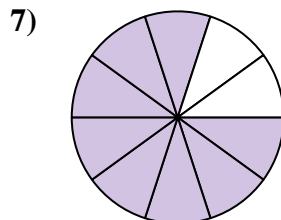
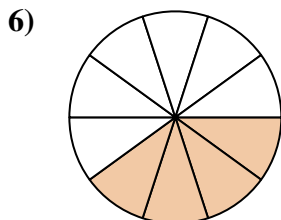
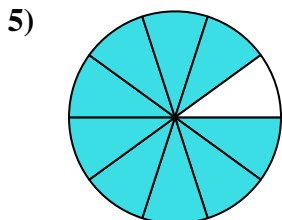

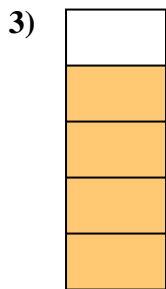


Answers



1. _____
2. _____
3. _____
4. _____
5. _____
6. _____
7. _____
8. _____
9. _____
10. _____
11. _____
12. _____
13. _____
14. _____
15. _____
16. _____
17. _____
18. _____
19. _____
20. _____



Determine if the shaded amount is 'more', 'less' or 'equal' to half.



Answers

1. more

2. less

3. more

4. more

5. more

6. less

7. more

8. less

9. less

10. more

11. less

12. more

13. less

14. less

15. less

16. equal

17. more

18. equal

19. equal

20. more